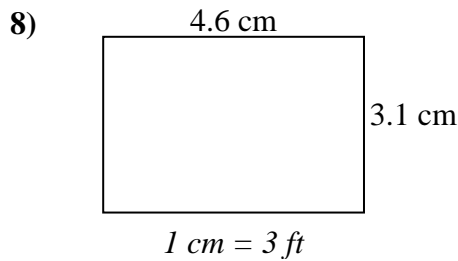
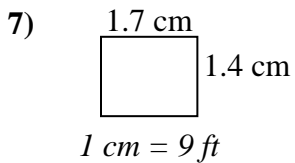
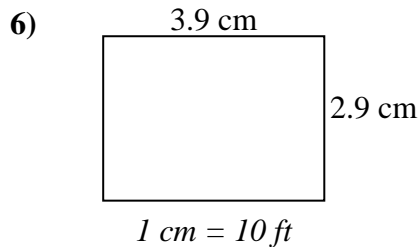
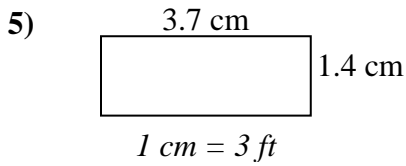
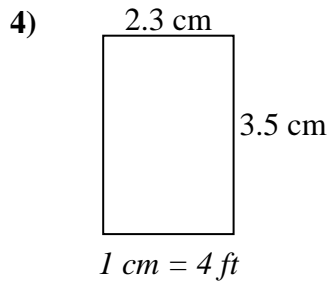
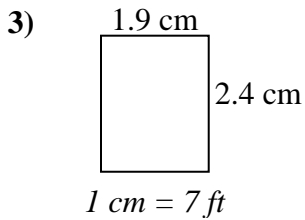
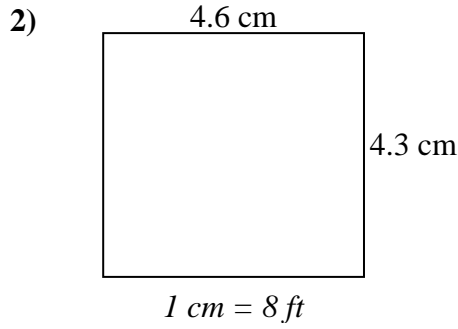
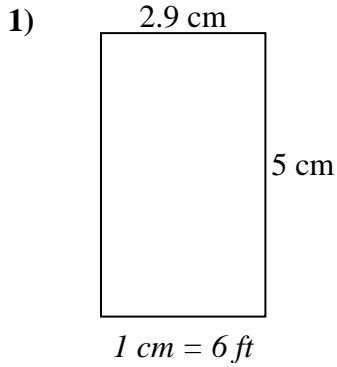




Determine the actual width, height and area of each scale rectangle.

Round the area to the nearest whole number.



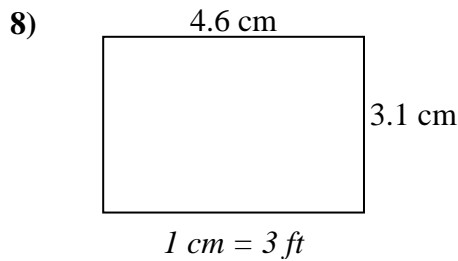
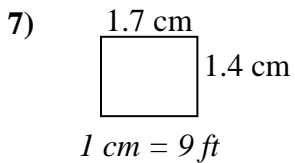
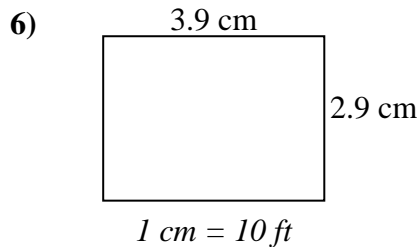
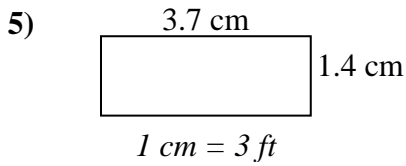
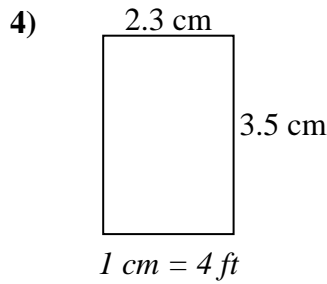
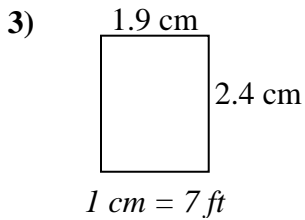
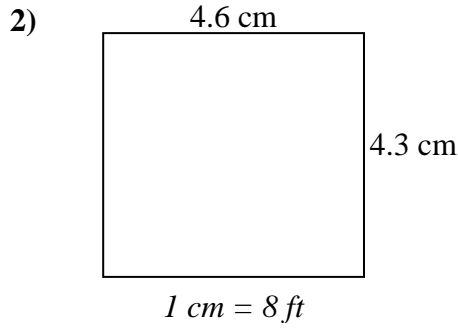
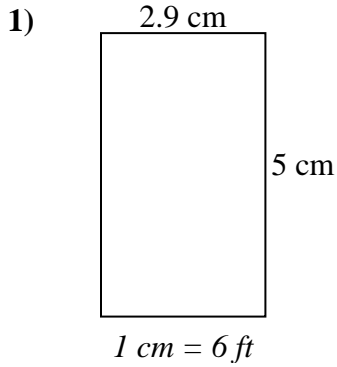
Answers

1. _____
2. _____
3. _____
4. _____
5. _____
6. _____
7. _____
8. _____



Determine the actual width, height and area of each scale rectangle.

Round the area to the nearest whole number.



Answers

- | | | | |
|----|-------------|-------------|--------------|
| 1. | <u>17.4</u> | <u>30</u> | <u>522</u> |
| 2. | <u>36.8</u> | <u>34.4</u> | <u>1,266</u> |
| 3. | <u>13.3</u> | <u>16.8</u> | <u>223</u> |
| 4. | <u>9.2</u> | <u>14</u> | <u>129</u> |
| 5. | <u>11.1</u> | <u>4.2</u> | <u>47</u> |
| 6. | <u>39</u> | <u>29</u> | <u>1,131</u> |
| 7. | <u>15.3</u> | <u>12.6</u> | <u>193</u> |
| 8. | <u>13.8</u> | <u>9.3</u> | <u>128</u> |